

OMG-OCUP-300^{Q&As}

OMG-Certified UML Professional Advanced Exam

Pass OMG OMG-OCUP-300 Exam with 100% Guarantee

Free Download Real Questions & Answers **PDF** and **VCE** file from:

<https://www.leads4pass.com/omg-ocup-300.html>

100% Passing Guarantee
100% Money Back Assurance

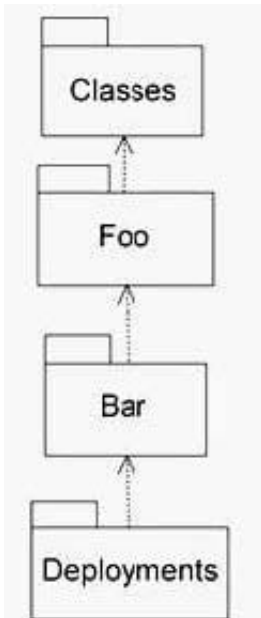
Following Questions and Answers are all new published by OMG
Official Exam Center

-  **Instant Download** After Purchase
-  **100% Money Back** Guarantee
-  **365 Days** Free Update
-  **800,000+** Satisfied Customers



QUESTION 1

The exhibit depicts the UML superstructure packages for structural models. What is the correct identity for packages Foo and Bar?



- A. Foo = Collaborations; Bar = Components
- B. Foo = Components; Bar = CompositeStructures
- C. Foo = StructuredClasses; Bar = Components
- D. Foo = Components; Bar = Artifacts
- E. Foo = CompositeStructures; Bar = Components

Correct Answer: C

QUESTION 2

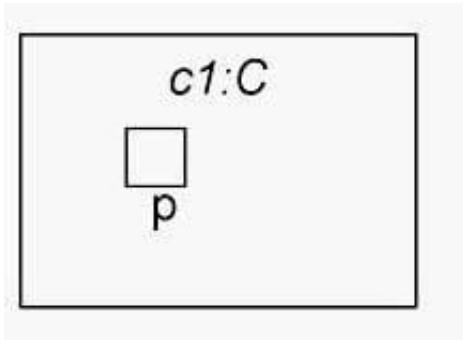
What are the instances of a power type?

- A. associations
- B. association instances
- C. association classes
- D. classifiers

Correct Answer: D

QUESTION 3

What does the composite structure notation show in the exhibit?



- A. p is a hidden port.
- B. p is a behavior port.
- C. p is a port on a part of composite C, which is not shown.
- D. p is a port providing a system service.

Correct Answer: A

QUESTION 4

When may a ReplyAction be invoked?

- A. only in conjunction with a ReadSelfaction
- B. only in conjunction with a SendSignalAction
- C. only in conjunction with an AcceptEventAction
- D. at any time
- E. only in conjunction with an AcceptCallAction

Correct Answer: E

QUESTION 5

What characteristics of components best enable them to be used to represent diverse and "largescale" aspects of information processing environments?

- A. ports, parts, and interfaces
- B. duality of association ends and attributes
- C. black-box semantics

D. ownership of potentially large numbers of model elements

Correct Answer: D

QUESTION 6

An association class possesses the properties of which elements? (Choose two)

- A. association
- B. interface
- C. class
- D. constraint
- E. expression

Correct Answer: AC

QUESTION 7

Where do the outputs of a loop node come from?

- A. loop variable pins
- B. output parameters
- C. object flows
- D. loop node results

Correct Answer: A

QUESTION 8

What does the deployment exhibit describe? (Choose three) A. a relationship between one AppServer and many DBServers



B. two nodes

C. a ternary association of nodes

- D. a relationship between one AppServer and one DBServer
- E. a communication path
- F. two classifiers linked by an association

Correct Answer: BEF

QUESTION 9

A ReplyAction always follows what action?

- A. AcceptCallAction
- B. AcceptEventAction
- C. ReadExtentAction
- D. CreateLinkObjectAction
- E. StartOwnedBehaviorAction

Correct Answer: A

QUESTION 10

What happens to the exception from a Raise Exception Action when used in a model that has no exception parameters declared?

- A. sent to the "ExceptionManager" object
- B. appended to an exception log
- C. handled by a default handler
- D. propagated to an enclosing protected node, if any
- E. ignored

Correct Answer: D

QUESTION 11

An information flow may NOT occur between which elements?

- A. packages
- B. instance specifications
- C. associations D. use cases

D. classes

Correct Answer: C

QUESTION 12

What is true about an InformationItem in UML 2.0?

- A. is not an abstraction
- B. can have generalization
- C. can have associations
- D. is not instantiable
- E. can have features

Correct Answer: D

QUESTION 13

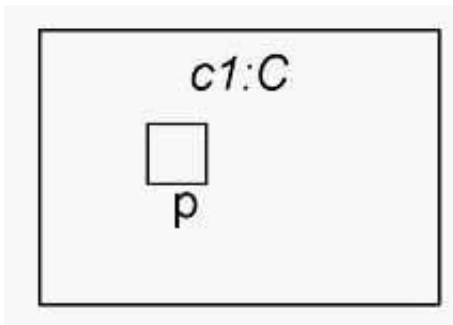
When a component is deleted, what happens to objects in a component's namespace?

- A. objects are deleted
- B. only those objects that participate in shared aggregations are retained
- C. objects continue to exist
- D. contents of the component's namespace are promoted to its superclass

Correct Answer: A

QUESTION 14

What does the composite structure notation show in the exhibit?



- A. p is a port on a part of composite C, which is not shown.

B. p is a port providing a system service.

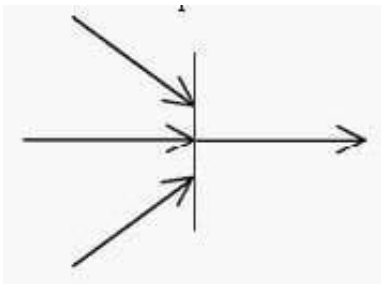
C. p is a hidden port.

D. p is a behavior port.

Correct Answer: C

QUESTION 15

In the exhibit, what is the minimum number of incoming arrows that must provide values for the outgoing arrow to be given a value?



A. two

B. one

C. none

D. three

Correct Answer: B

[Latest OMG-OCUP-300 Dumps](#)

[OMG-OCUP-300 Study Guide](#)

[OMG-OCUP-300 Exam Questions](#)