

C2170-051^{Q&As}

IBM i2 Analyst's Notebook V8.9

Pass IBM C2170-051 Exam with 100% Guarantee

Free Download Real Questions & Answers **PDF** and **VCE** file from:

<https://www.leads4pass.com/c2170-051.html>

100% Passing Guarantee
100% Money Back Assurance

Following Questions and Answers are all new published by IBM Official Exam Center

-  **Instant Download** After Purchase
-  **100% Money Back** Guarantee
-  **365 Days** Free Update
-  **800,000+** Satisfied Customers



QUESTION 1

An intelligence analyst wants to identify the account(s) being paid by account 123456789. How can this be set up in Visual Search?

C A.



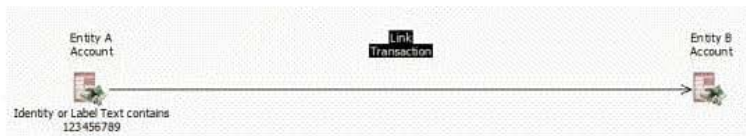
Apply To:

Entity A

Link

Entity B

C B.




Apply To:

Entity A

Link

Entity B

C C.



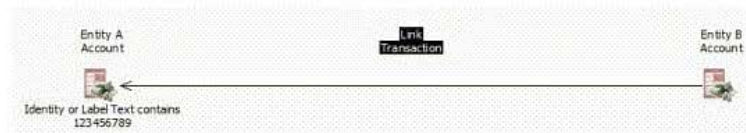
Apply To:

Entity A

Link

Entity B

C D.



Apply To:

Entity A

Link

Entity B

A. Exhibit A

B. Exhibit B

C. Exhibit C

D. Exhibit D

Correct Answer: B

QUESTION 2

Frames can be used to draw attention to key entities. Which of the following is NOT a reason to use frames in a chart?

A. To distinguish groups of entities.

B. To map entities to Google Earth.

C. To indicate entities with shared attributes as a result of applying Conditional Formatting.

D. To change the appearance of entities selected using analysis tools such as filtering or Social Network Analysis.

Correct Answer: B

QUESTION 3

When adding a link to a directed connection and the new link has the same direction as any existing link, what happens to the connection multiplicity?

A. The connection remains Directed.

B. The connection is changed to Single.

C. The connection is changed to Multiple.

D. The connection multiplicity is changed to a link with corners.

Correct Answer: C

QUESTION 4

Once Analyst's Notebook has identified possible matching entities, how are duplicates removed?

A. Manually change the identity of one entity to match the other entity

B. Select the matching entities and press Ctrl+D simultaneously

C. Select each of the matching entities and click the Link button.

D. Select each of the matching entities and click the Merge button.

Correct Answer: D

QUESTION 5

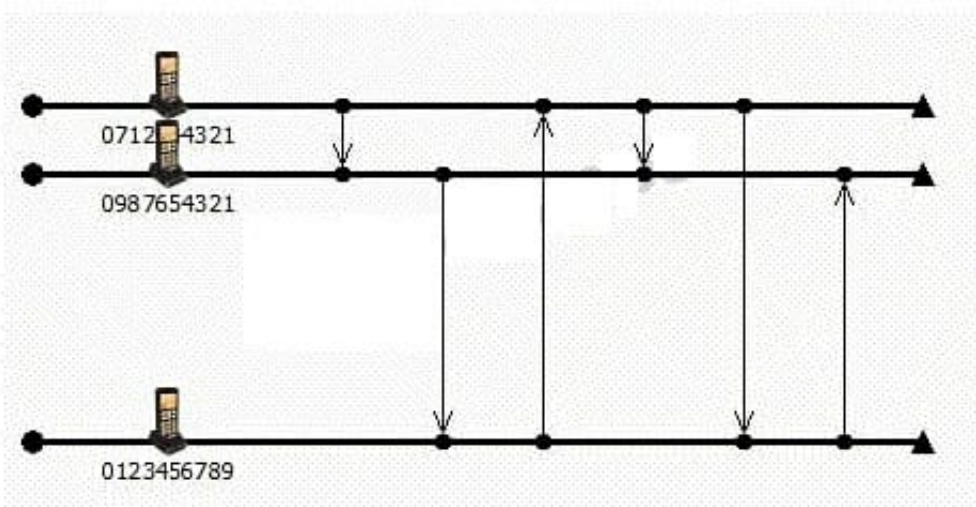
Which of the following statements about an attribute is NOT TRUE?

- A. It can be hidden on the chart.
- B. It is used in complex searches.
- C. It can display date and time data.
- D. It prevents duplicate entities from being added.

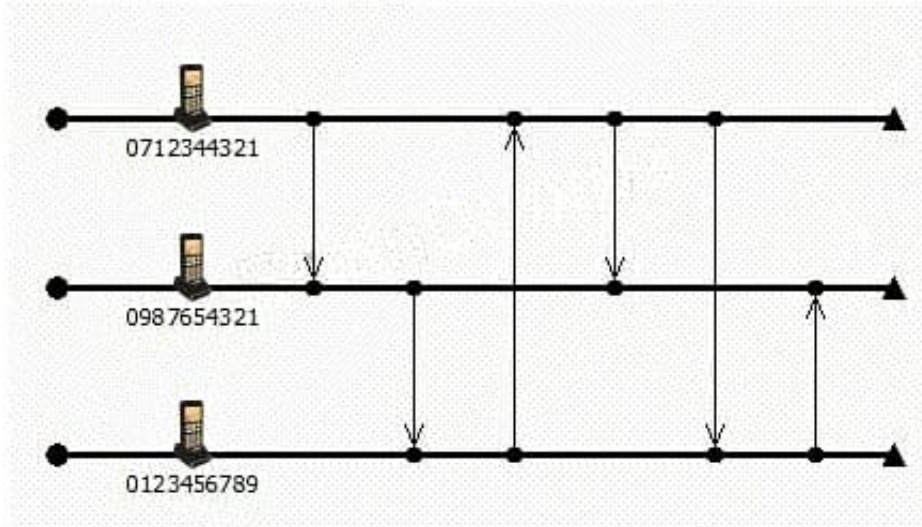
Correct Answer: D

QUESTION 6

Some telephone calls have been charted, as follows:



An intelligence analyst is tasked with printing out a copy of the chart for management.



To make the chart easier to read, which one layout has been used?

- A. Ordered
- B. Theme Line
- C. Proportional
- D. Grouped by Time

Correct Answer: B

QUESTION 7

An analyst wants to hide an attribute on a chart. How can this be accomplished?

- A. Right-click on the chart and choose Chart Properties.
- B. Right-click on the chart and choose Combined Properties.
- C. Select the items on the chart, right-click on the items and choose Chart Properties.
- D. Select the items on the chart, right-click on the items and choose Combined Properties.

Correct Answer: A

QUESTION 8

Which of the following is NOT an Entity Representation?

- A. Icon
- B. Photo Block
- C. Theme Line
- D. Event Frame

Correct Answer: B

QUESTION 9

Which Entity Type is shown here?

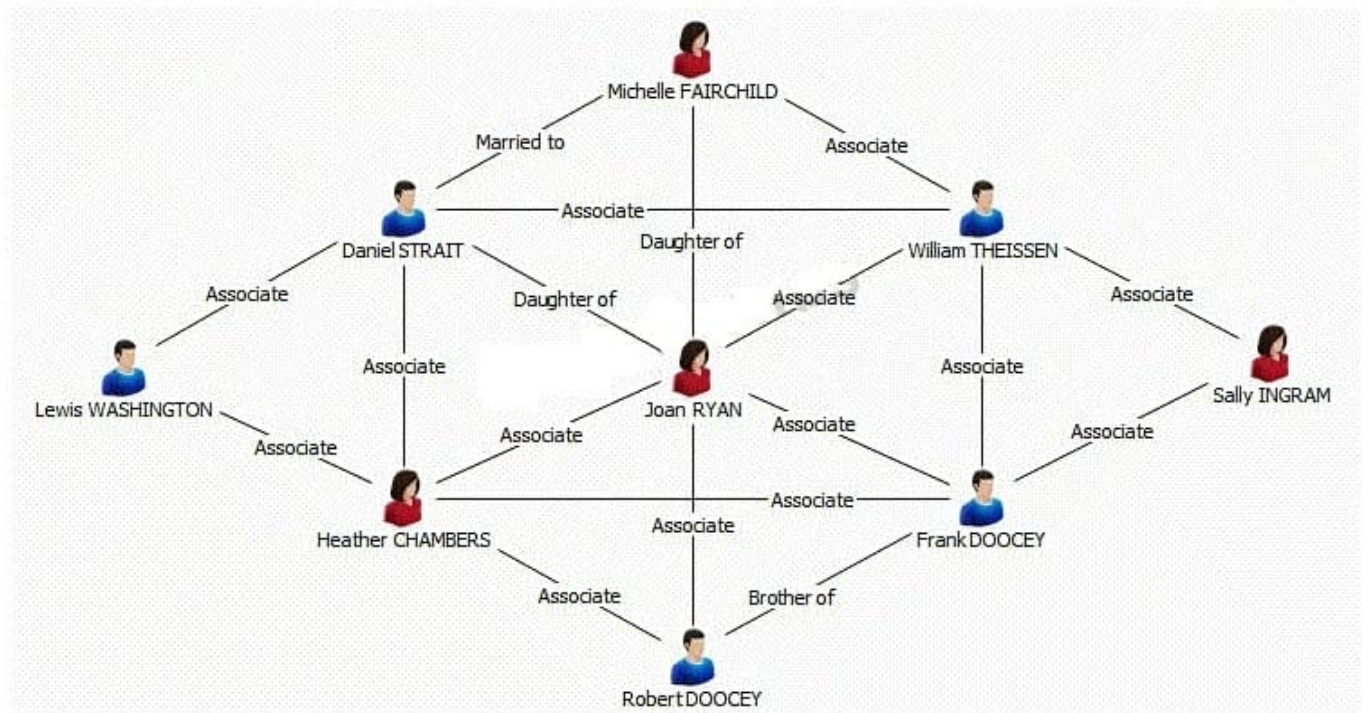


- A. Icon
- B. Male
- C. Picture
- D. Event Frame

Correct Answer: B

QUESTION 10

An analyst has the following chart:



Which of the following procedures would the analyst take to bring over ONLY Joan RYAN and her direct entity connections in a different chart?

- A. Right-click on Joan RYAN > Copy
- B. Right-click on Joan RYAN > Select Connections > Right-click > Copy
- C. Right-click on Joan RYAN > Select Connections > Right-click Select Ends > Right-click > Copy
- D. Right-click on Joan RYAN > Select Connections > Right-click Select Ends > Right-click > Copy Selection Only

Correct Answer: D

QUESTION 11

Intelligence has arrived in a number of documents in the UK. A typical example is "Zackary Armstrong is using the following telephones numbers - 0123456789, 0987654321 and 0712344321". An intelligence analyst has been tasked with creating a chart so that questions such as the following can be answered:

-Who is using 3 or more phones?

-

Which phones are being used by 3 or more people?

Which of the following chart structures would be able to answer this question using a search?

- A.
Exhibit A
- B.
Exhibit B
- C.
Exhibit C
- D.
Exhibit D

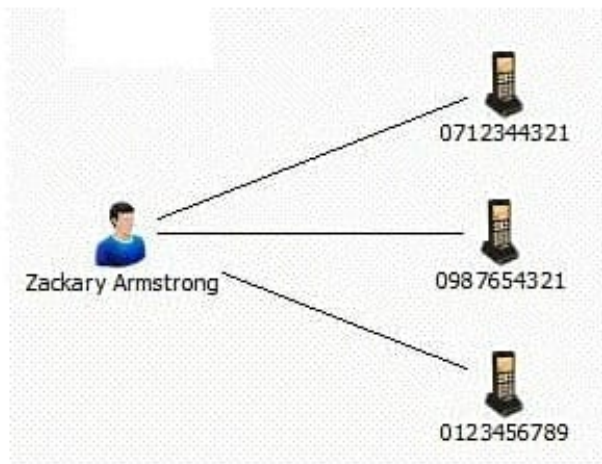
A.



B.



C.



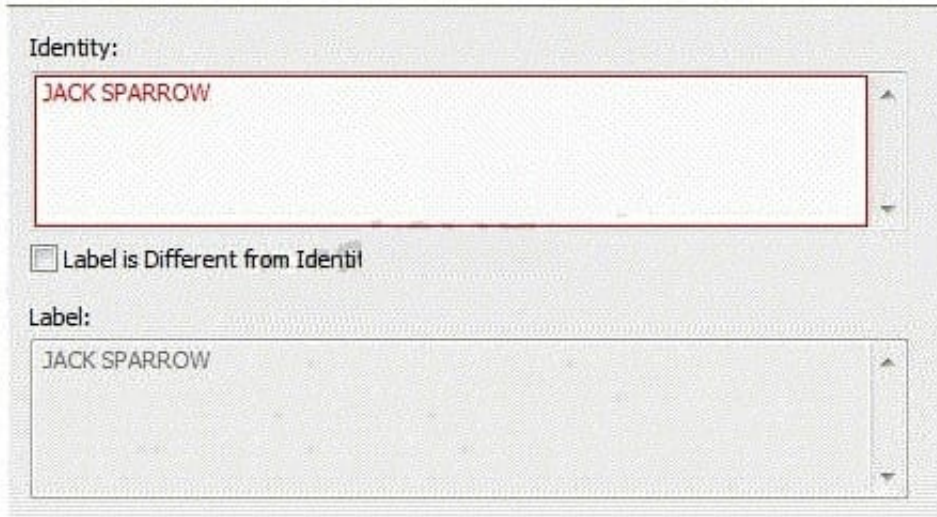
D.



Correct Answer: C

QUESTION 12

An intelligence analyst is entering an identity for an entity. After the identity is entered, the Identity field turns red.



The screenshot shows a software interface with two text input fields. The top field is labeled 'Identity:' and contains the text 'JACK SPARROW'. The text in this field is red, and the field's border is also red. Below this field is a checkbox labeled 'Label is Different from Identity'. The bottom field is labeled 'Label:' and also contains the text 'JACK SPARROW'. The text in this field is black, and the field's border is black.

What does this indicate?


- A. There is a typographical error in the identity.
- B. The Identity field does not allow for all capital letters.
- C. This identity is already used for another entity on the chart.
- D. There are not enough characters entered in the Identity field.

Correct Answer: C

QUESTION 13

An intelligence analyst wants to identify the telephone(s) being called by telephone 5558675309. How can this be set up in Visual Search?

C A.



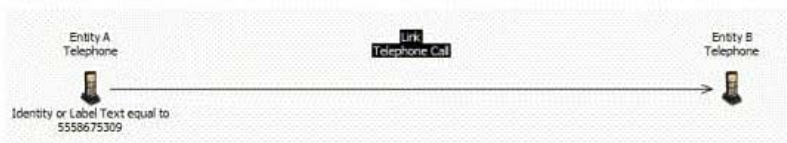
Apply To:

Entity A

Link

Entity B

C B.



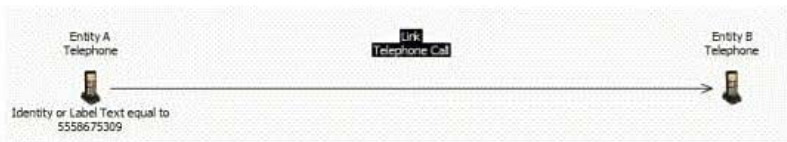
Apply To:

Entity A

Link

Entity B

C C.



Apply To:

Entity A

Link

Entity B

C D.



Apply To:

Entity A

Link

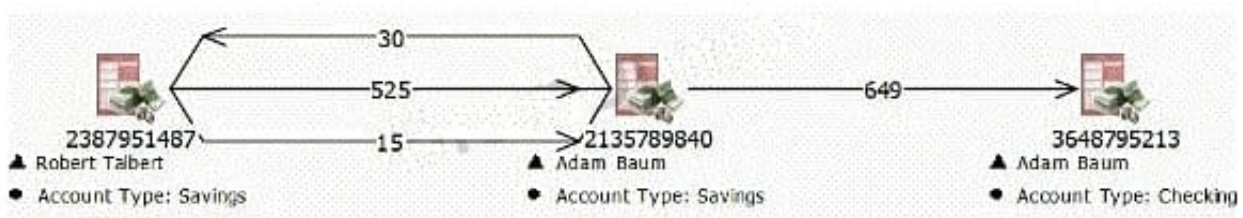
Entity B

- A. Exhibit A
- B. Exhibit B
- C. Exhibit C
- D. Exhibit D

Correct Answer: B

QUESTION 14

Review this section of a financial transaction chart:



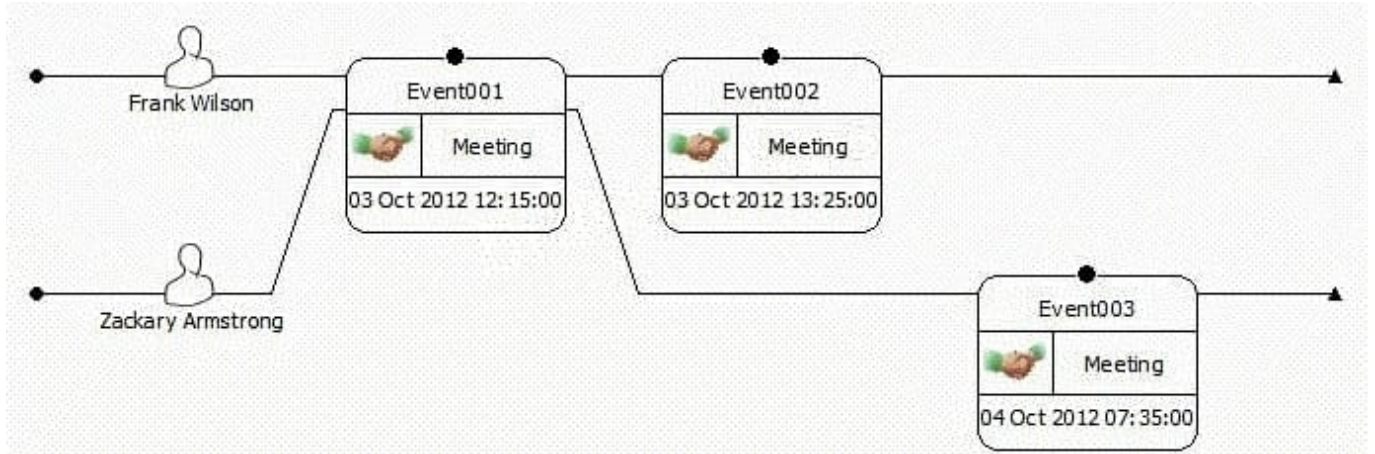
What type of multiplicity connection is shown for the links between the two Savings Accounts?

- A. Single
- B. Multiple
- C. Directed
- D. Closed Loop

Correct Answer: B

QUESTION 15

A researcher has been tasked with creating a spreadsheet ready to be imported into Analyst's Notebook. The chart required looks like this:



Which of the following spreadsheets is ready for importing, and does not need any spreadsheet formulas or Column Actions to change it in any way?

A.

| | | | | |
|-------------------|-------------------|---------|------------|-------|
| Person | Frank Wilson | | | |
| Activities | Event001 | Meeting | 3 Oct 2012 | 12:15 |
| | Event002 | Meeting | 3 Oct 2012 | 13:25 |
| Person | Zackary Armstrong | | | |
| Activities | Event001 | Meeting | 3 Oct 2012 | 12:15 |
| | Event003 | Meeting | 4 Oct 2012 | 07:35 |

B.

| | | | | |
|-----------------|-------------------|---------|------------|-------|
| Activity | Event001 | Meeting | 3 Oct 2012 | 12:15 |
| Person | Frank Wilson | | | |
| Person | Zackary Armstrong | | | |
| Activity | Event002 | Meeting | 3 Oct 2012 | 13:25 |
| Person | Frank Wilson | | | |
| Activity | Event003 | Meeting | 4 Oct 2012 | 07:35 |
| Person | Frank Wilson | | | |

C.

| Person | Activity | Type | Date | Time |
|-------------------|----------|---------|------------|-------|
| Frank Wilson | Event001 | Meeting | 3 Oct 2012 | 12:15 |
| Frank Wilson | Event002 | Meeting | 3 Oct 2012 | 13:25 |
| Zackary Armstrong | Event001 | Meeting | 3 Oct 2012 | 12:15 |
| Zackary Armstrong | Event003 | Meeting | 4 Oct 2012 | 07:35 |

D.

| Person | | Activity | | | |
|-------------------|-------------------|----------|---------|------------|-------|
| Frank Wilson | Zackary Armstrong | Event001 | Meeting | 3 Oct 2012 | 12:15 |
| Frank Wilson | | Event002 | Meeting | 3 Oct 2012 | 13:25 |
| Zackary Armstrong | | Event003 | Meeting | 4 Oct 2012 | 07:35 |

A. Exhibit A

B. Exhibit B

C. Exhibit C

D. Exhibit D

Correct Answer: C

[C2170-051 VCE Dumps](#)

[C2170-051 Practice Test](#)

[C2170-051 Study Guide](#)