

# ISEE-TEST<sup>Q&As</sup>

Independent School Entrance Examination

## Pass Test Prep ISEE-TEST Exam with 100% Guarantee

Free Download Real Questions & Answers **PDF** and **VCE** file from:

<https://www.leads4pass.com/isee-test.html>

100% Passing Guarantee  
100% Money Back Assurance

Following Questions and Answers are all new published by Test Prep  
Official Exam Center

-  **Instant Download** After Purchase
-  **100% Money Back** Guarantee
-  **365 Days** Free Update
-  **800,000+** Satisfied Customers



**QUESTION 1**

Compare the quantity in column A to the quantity in Column B.

$$f(x) = 4x^2 + 9$$

Column A

Column B

$$f(-5)$$

$$f(5)$$

- A. The quantity in Column A is greater.
- B. The quantity in Column B is greater.
- C. The two quantities are equal.
- D. The relationship cannot be determined from the information given.

Correct Answer: C

---

**QUESTION 2**

Select the word that best completes the sentence.

One of the great \_\_\_\_\_ of solar energy is that it produces virtually no pollution.

- A. benefits
- B. hazards
- C. obstacles
- D. tasks

Correct Answer: A

---

**QUESTION 3**

The area of a rectangle is 100 cm<sup>2</sup>.

**Column A**

The perimeter  
of the rectangle

**Column B**

30 cm

Compare the quantity in column A to the quantity in Column B.

- A. The quantity in Column A is greater.
- B. The quantity in Column B is greater.
- C. The two quantities are equal.
- D. The relationship cannot be determined from the information given.

Correct Answer: A

---

**QUESTION 4**

Alicia's math quizzes are graded on a scale from 0 to 10. Her average on three quizzes is a 6. Her final math quiz will be counted twice towards her average.

What does she need to score on her final quiz in order to raise her average score to a 7?


- A. 7
- B. 7.5
- C. 8 D. 8.5

Correct Answer: D


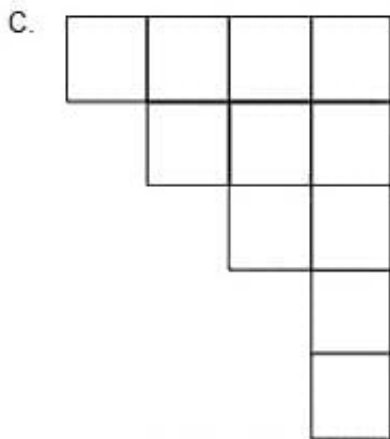
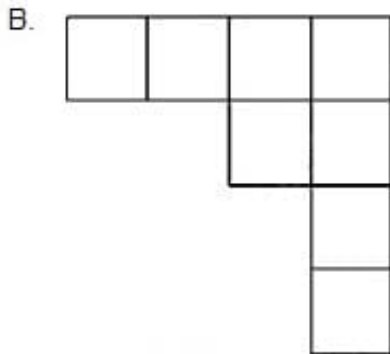
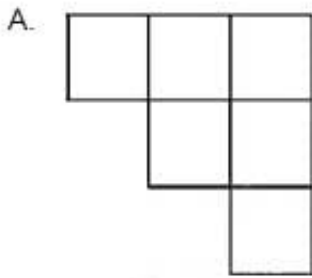
---

**QUESTION 5**

Use the diagram to answer the question.



Which piece would complete the diagram to make a square?



A. Option A

B. Option B

C. Option C

D. Option D

Correct Answer: C

[Latest ISEE-TEST Dumps](#)

[ISEE-TEST PDF Dumps](#)

[ISEE-TEST Practice Test](#)