

ASVAB-SECTION-9^{Q&As}

ASVAB Section Nine : Assembling Objects

**Pass ASVAB ASVAB-SECTION-9 Exam with 100%
Guarantee**

Free Download Real Questions & Answers **PDF** and **VCE** file from:

<https://www.leads4pass.com/asvab-section-9.html>

100% Passing Guarantee
100% Money Back Assurance

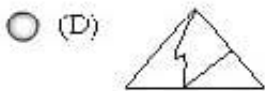
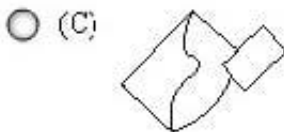
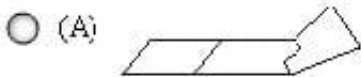
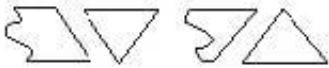
Following Questions and Answers are all new published by ASVAB
Official Exam Center

-  **Instant Download** After Purchase
-  **100% Money Back** Guarantee
-  **365 Days** Free Update
-  **800,000+** Satisfied Customers



QUESTION 1

Determine which of the choices best solves the problem shown in the first picture. The problem is presented in the first drawing and the remaining four drawings are possible solutions.



A. Option A

B. Option B

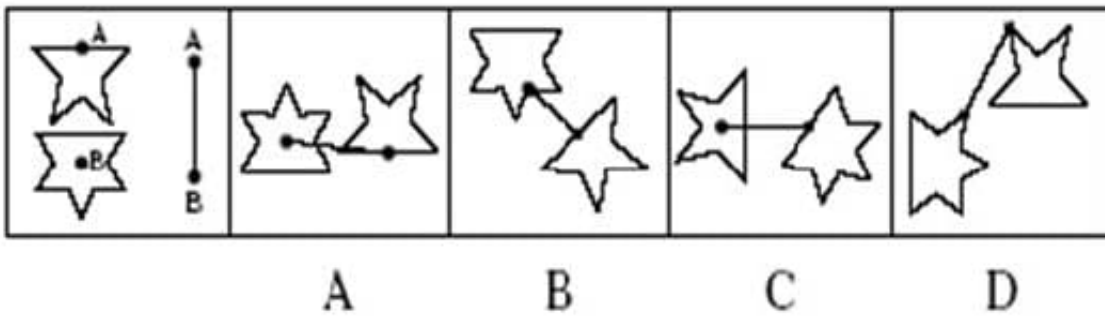
C. Option C

D. Option D

Correct Answer: B

QUESTION 2

Determine which of the choices best solves the problem shown in the first picture. The problem is presented in the first drawing and the remaining four drawings are possible solutions.

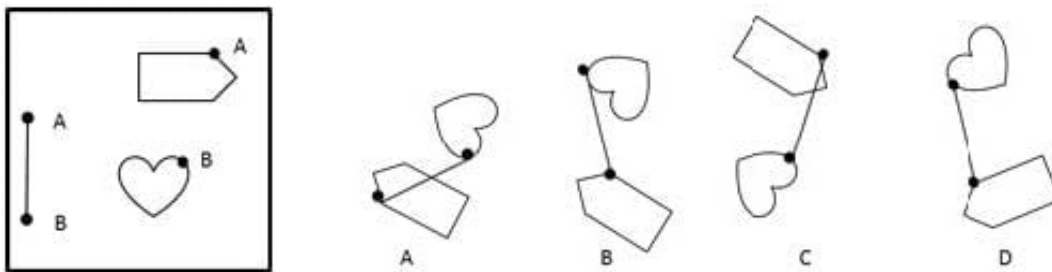


- A. Option A
- B. Option B
- C. Option C
- D. Option D

Correct Answer: A

QUESTION 3

Which figure best shows how the objects in the left box will touch if the letters for each object are matched?

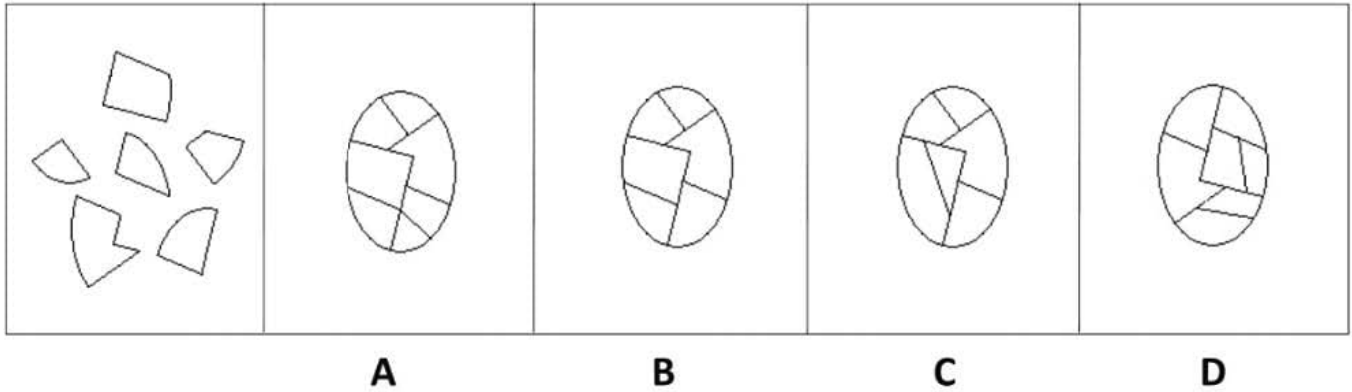


- A. Option A
- B. Option B
- C. Option C
- D. Option D

Correct Answer: A

QUESTION 4

Which of these images best solves the problem in the first picture?



A. Option A

B. Option B

C. Option C

D. Option D

Correct Answer: B

QUESTION 5

Determine which of the choices best solves the problem shown in the first picture. The problem is presented in the first drawing and the remaining four drawings are possible solutions.



(A)



(B)



(C)



(D)



A. Option A

B. Option B

C. Option C

D. Option D

Correct Answer: C

[Latest ASVAB-SECTION-9 Dumps](#)

[ASVAB-SECTION-9 Practice Test](#)

[ASVAB-SECTION-9 Exam Questions](#)